







Fraction Heroes



Activity Sheet

Name: _____ Class: _____

Insert the symbols $<$, $=$, or $>$ to compare each set of fractions.

1  $\frac{1}{3}$  $\frac{2}{3}$

2  $\frac{3}{4}$  $\frac{2}{4}$

3  $\frac{1}{6}$  $\frac{1}{3}$

4 $\frac{2}{3}$ $\frac{2}{8}$

5 $\frac{3}{4}$ $\frac{1}{4}$

6 $\frac{1}{8}$ $\frac{1}{5}$

7 $\frac{1}{3}$ $\frac{1}{2}$

8 $\frac{3}{4}$ $\frac{3}{8}$

9 $\frac{2}{2}$ $\frac{1}{2}$

10 $\frac{3}{6}$ $\frac{5}{6}$

11 $\frac{1}{8}$ $\frac{1}{4}$

12 $\frac{2}{6}$ $\frac{2}{4}$

13 $\frac{1}{6}$ $\frac{5}{6}$

14 $\frac{1}{4}$ $\frac{2}{4}$

15 $\frac{5}{6}$ $\frac{5}{8}$

16 $\frac{2}{2}$ $\frac{2}{8}$

17 $\frac{6}{8}$ $\frac{7}{8}$

18 $\frac{3}{3}$ $\frac{1}{3}$

19 $\frac{3}{6}$ $\frac{3}{3}$

20 $\frac{1}{4}$ $\frac{1}{6}$

